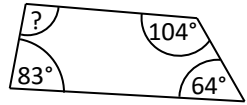
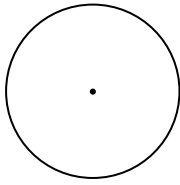
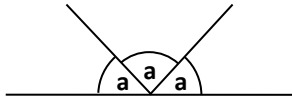
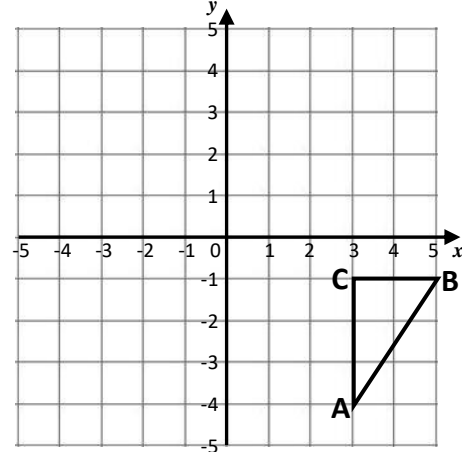
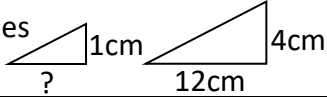


Name: _____

Date: _____

Class/Group: _____

A: Place Value, Add, Subtract, Multiply and Divide		B: Fractions, Ratio, Proportion and Algebra		C: Geometry, Position and Direction	
1. Write in words: 2,134,005	6:1	11. Simplify this fraction fully: $\frac{9}{36}$	6:7	21. Find the missing angle. 	6:24
2. What is the value of the 3 in this number? 3,954,682	6:1	12. $1\frac{5}{6} + \frac{1}{4} =$	6:8	22. On the circle draw a line to label the diameter . 	6:25
3. Round 8,523,912 to the nearest ten thousand .	6:1	13. $\frac{2}{8} \div 4 =$	6:9		
4. The temperature rises from -7°C to 9°C . How many degrees has it risen?	6:2	14. What is the value of the 8 in this number: 64.381	6:10	23. Find the value of a . 	6:26
5. $2,355 \times 16$	6:3	15. Give your answer as a decimal: $43.5 \div 6$	6:11	24. What are the co-ordinates of A ? 	6:27
6. What is the remainder? $3,300 \div 19$	6:3	16. Write this fraction as a decimal and a percentage . $\frac{3}{5}$	6:12		
7. Write two common factors of 30 and 45.	6:4	17. Find 20% of 180.	6:13		
8. There are four prime numbers between 10 and 20. What are they?	6:4	18. These shapes are similar . 	6:14		
9. $85 - 8 \times 7$	6:5	19. 1 bag has s sweets. I get 2 bags. Write an expression for no. of sweets.	6:15		
10. What is my change if I buy as many £5.98 footballs as I can with £30?	6:6	20. Which two numbers add together to make 25 and have a difference of 1?	6:17	25. Reflect triangle ABC in the x-axis .	6:28
Total (A)		Total (B)		Total (C)	
Test Total (A+B+C)		R (0-9)		G (20-25)	
		Y (10-19)			